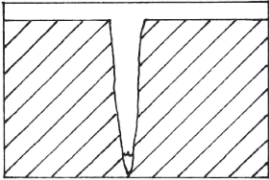
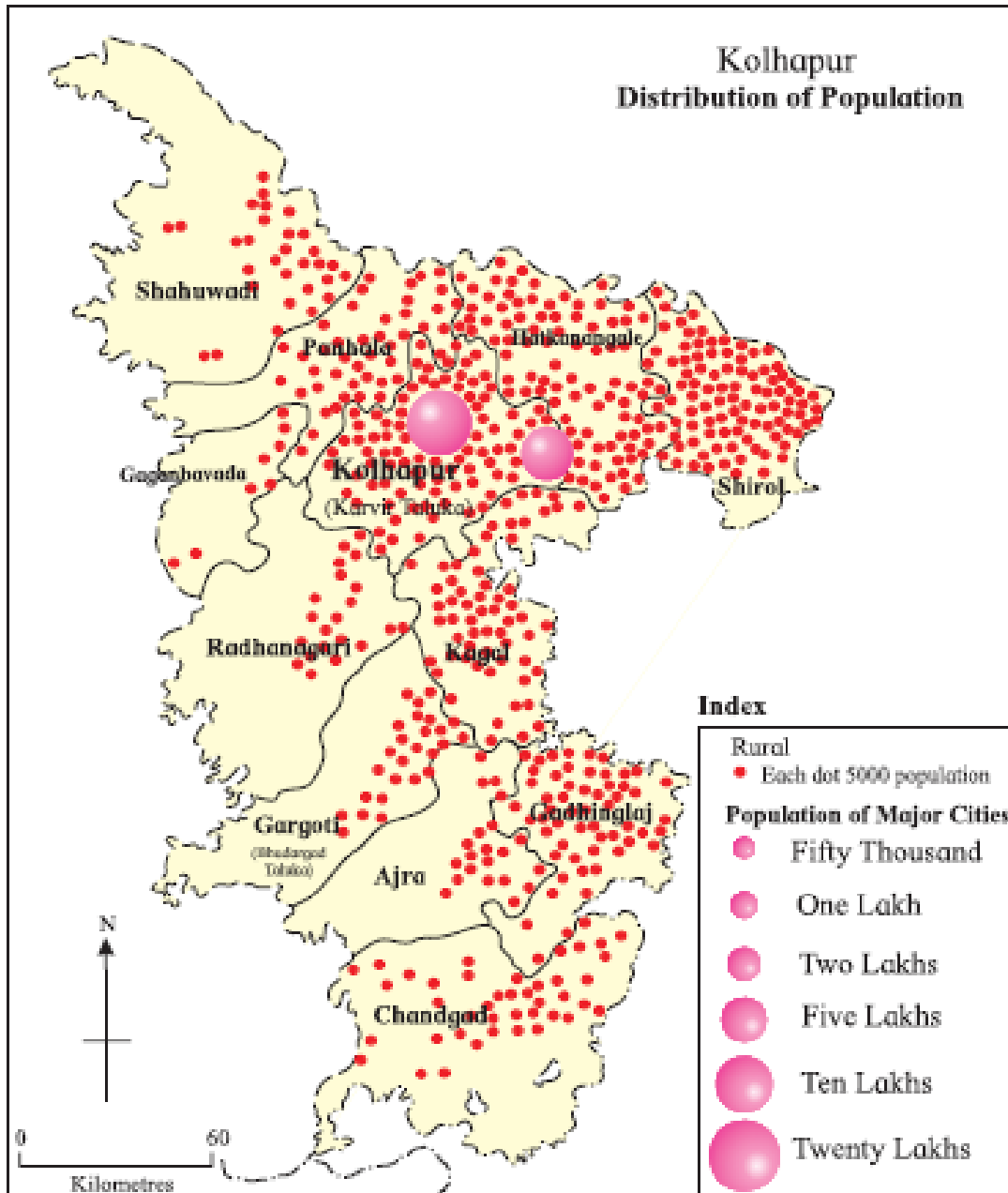


Chapter: 1,2,3,4,5,8,9

- Q.1 Choose the correct alternative and rewrite the sentence** **3**
- 1 On which of the following is slow movement in the interior of the earth depends.
a. Land forms b. Velocity c. Direction
 - 2 The formation of extensive plateaus is a result of which type of movement?
a. Mountain-building. b. continent-building c. Horizontal.
 - 3 For the formation of a rift valley, which of the following processes should occur in the earth's crust?
a. Compression b. Tension c. Weathering
- Q.2 Name the following** **3**
- 1 Identify the type on the basis of the statement/ Diagram

 - 2 Which method will you use for the following information.
Temperature distribution in Maharashtra state.
 - 3 Which method will you use for the following information.
Distribution of population density in India.
- Q.3 Differentiate the following (Any Three)** **6**
- 1 Earthquakes and Volcanoes.
 - 2 Dew and Frost
 - 3 Primary Waves and Secondary Waves
 - 4 OPEC and APEC
- Q.4 State whether the given statement is right or wrong and correct the wrong one.(Any Three)** **3**
- 1 SAARC works towards economic development and enhancing the social and cultural harmony of the South East Asian Countries.
 - 2 The work of ground water is effective in the area with soft - rocks.
 - 3 The breaking down of rocks into smaller particles is called weathering.
 - 4 In choropleth maps. only one value is assigned to the sub-administrative unit.
- Q.5 Give Geographical Reasons (Any Three)** **9**
- 1 The Barren island is becoming conical in shape.
 - 2 We can divide countries into three groups on the basis of the economies.
 - 3 Economy begins at home.
 - 4 There is a difference in the formation of the Meghalaya plateau and the Deccan Plateau.
- Q.6 Question related to graph / diagram:** **4**

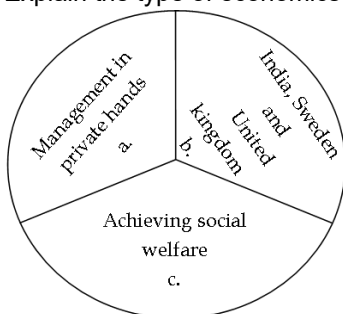
1 Answer the following questions based on the given map:



- i. Which method has been used to show the distribution of population in the district?
- ii. Explain the direction wise distribution of population from dense to sparse.
- iii. What is the population shown by the largest circle? Which place is that?
- iv. Which Taluka has the least population?

Q.7 Answer in detail/ brief (Any Three)

1 Explain the type of economics by filling correct information in the place of questions in the circle.



- 2 State the objectives of the WTO.
- 3 How does biological weathering occur?
- 4 Explain the use and types of distributional maps.